

Questions

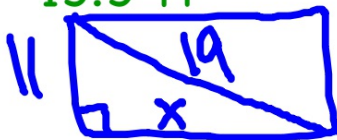
7.1 Practice – Round all answers to the nearest tenth, if necessary.

1. A painter leans a 15-ft ladder against a house. The base of the ladder is 5 ft from the house. How high on the house does the ladder reach?

14.1 ft

2. The size of a computer monitor is the length of its diagonal. You want to buy a 19-in monitor that has a height of 11 in. What is the width of the monitor?

15.5 ft



$$11^2 + x^2 = 19^2$$
$$121 + x^2 = 361$$

$$\sqrt{x^2} = \sqrt{200}$$
$$x = 14.1$$

3. You are designing dinnerware. You want to make a square plate that fits a 20 cm chopstick along the diagonal. Find the length of the sides of the square.

14.1 cm



$$x^2 + x^2 = 20^2$$
$$2x^2 = 400$$

4. Is a triangle with the following side lengths acute, obtuse, or right?

a) 7, 8, 9
acute


b) 20, 28, 19
obtuse

c) 33, 65, 56
right

Summary:

Questions

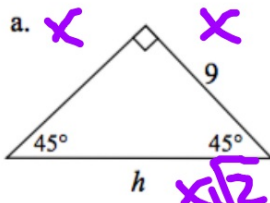
7.2 EQ: Same as 7.1



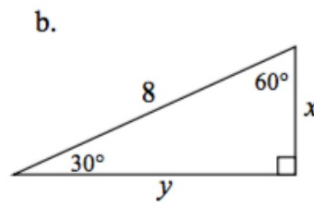
Questions

Example 1:

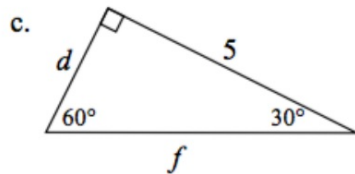
Find the value of each variable. Leave your answers exact.



$x = 9$
 $h = x\sqrt{2} = 9\sqrt{2}$



$\frac{6}{\sqrt{2}} = \frac{x\sqrt{2}}{\sqrt{2}}$



d.

$6 = x\sqrt{2}$

$x = \frac{6}{\sqrt{2}} \left(\frac{\sqrt{2}}{\sqrt{2}} \right) = \frac{6\sqrt{2}}{2}$

Summary: